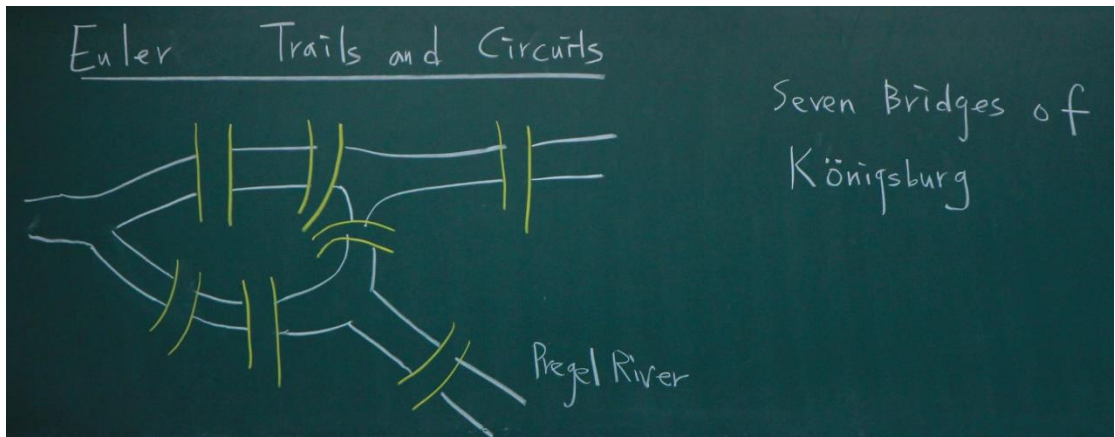




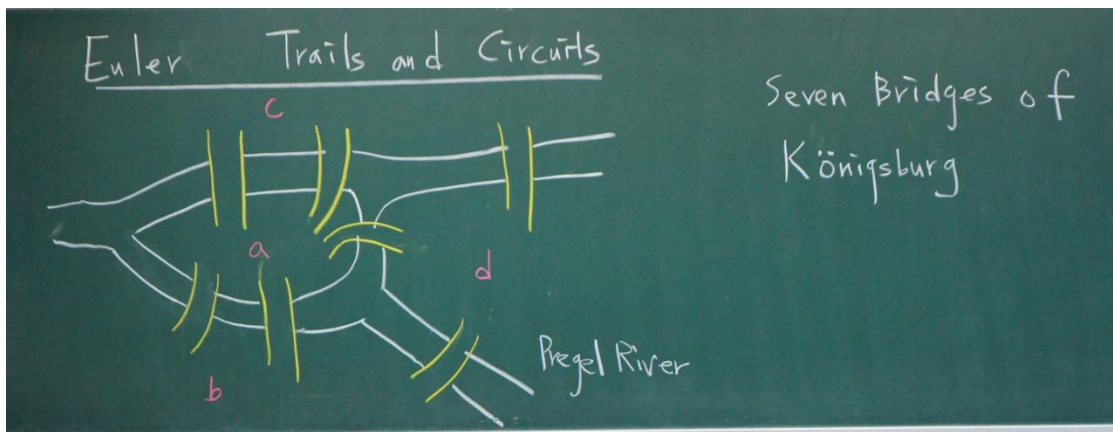
【10920 趙啟超教授離散數學 / 第 20 堂版書】






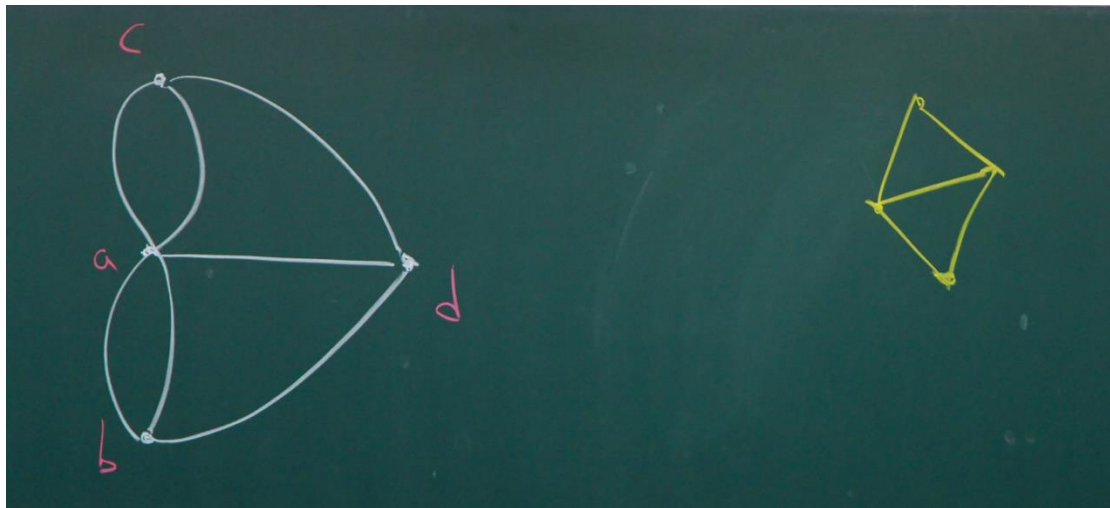
Question : Is it possible to walk through the city, cross each bridge exactly once, and return to the starting point ?

Answer : No. Since if it is possible, then point a must have even number of bridges connected to it. (Solved by Euler in 1736.)



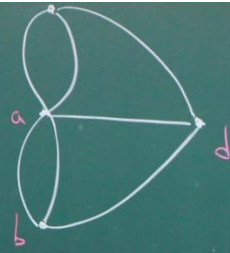
Question : Is it possible to walk through the city, cross each bridge exactly once, and return to the starting point ?

Answer : No. Since if it is possible, then point a must have even number of bridges connected to it. (Solved by Euler in 1736.)



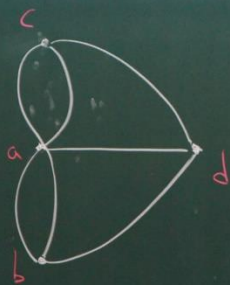
Def An Euler circuit in an undirected graph (simple graph or multigraph)  $G$  (with no isolated vertices) is a circuit that traverses every edge in  $G$  exactly once.  
 An Euler trail is an open trail that traverses each edge in  $G$  exactly once.





Def. An Euler circuit in an undirected graph (simple graph or multigraph)  $G$  (with no isolated vertices) is a circuit that traverses every edge in  $G$  exactly once.  
 An Euler trail is an open trail that traverses each edge in  $G$  exactly once.

Def. An Euler circuit in an undirected graph (simple graph or multigraph)  $G$  (with no isolated vertices) is a circuit that traverses every edge in  $G$  exactly once.  
 An Euler trail is an open trail that traverses each edge in  $G$  exactly once.



Theorem  $G$  has an Euler circuit iff  
 $G$  is connected and every vertex in  $G$   
has even degree.

Proof " $\Rightarrow$ " (i) For any two distinct vertices in  $G$ ,  
since the Euler circuit passes through  
all edges of  $G$ , the Euler circuit connects  
the two vertices. Hence  $G$  is connected.

Proof " $\Rightarrow$ " (i) For any two distinct vertices in  $G$ ,  
since the Euler circuit passes through  
all edges of  $G$ , the Euler circuit connects  
the two vertices. Hence  $G$  is connected.

(ii) Each time the Euler circuit  
traverses a vertex  $v$ , it passes  
two edges connected to  $v$ :  
the return edge and the departure  
edge. Hence the total number of  
edges at  $v$  is twice the number  
of departure edges and so must be even.



Theorem  $G$  has an Euler circuit iff  
 $G$  is connected and every vertex in  $G$   
has even degree.

Proof " $\Rightarrow$ " (i) For any two distinct vertices in  $G$ ,  
since the Euler circuit passes through  
all edges of  $G$ , the Euler circuit connects  
the two vertices. Hence  $G$  is connected.

(ii) Each time the Euler circuit  
traverses a vertex  $v$ , it passes  
two edges connected to  $v$ :  
the return edge and the departure  
edge. Hence the total number of  
edges at  $v$  is twice the number  
of departure edges and so must be even.

" $\Leftarrow$ " Let us give an algorithm for finding an  
Euler circuit.

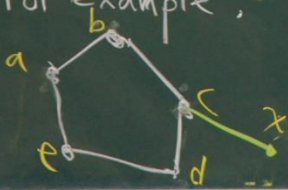
a. Start at any vertex, say  $a$ , and begin  
traversing along edges at random (never  
repeating an edge) until we get stuck.  
Then when we get stuck, we must have  $\circ$ .

repeating an edge) until we get stuck.  
Then when we get stuck, we must have

formed a circuit (since the degree of each vertex is even).

b. If some vertex in the circuit has an unused edge, then "break out".

For example,



original circuit  
abcdea  
breakout:  
cdeabcx

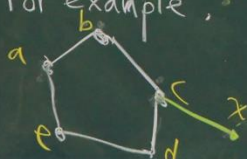
" $\Leftarrow$ " Let us give an algorithm for finding an Euler circuit.

a. Start at any vertex, say a, and begin traversing along edges at random (never repeating an edge) until we get stuck. Then when we get stuck, we must have

formed a circuit (since the degree of each vertex is even).

b. If some vertex in the circuit has an unused edge, then "break out".

For example,



original circuit  
abcdea  
breakout:  
cdeabcx



(simple graph or multigraph)  $G$  (with no isolated vertices) is a circuit that traverses every edge in  $G$  exactly once.  
An Euler trail is an open trail that traverses each edge in  $G$  exactly once.

c. Continue forming circuits and breaking out as long as possible. If breakout is not possible, then we have found an Euler circuit. Why? Let  $e = \{v, w\}$  be an edge in the graph. Since  $G$  is connected, there must be a path from  $a$  (the starting vertex) to  $v$ , say  $a, a_1, a_2, \dots, v$ .

the return edge and the departure edge. Hence the total number of edges at  $v$  is twice the number of departure edges and so must be even.

Then  $\{a, a_1\}$  must be in the circuit, or we could break out at  $a$ .

Similarly,  $a_2, \dots, v$  must all be in the circuit. Since  $v$  is in the circuit,  $e = \{v, w\}$  must also be in the circuit, or breakout at  $v$  is possible. Therefore, every edge must be included in the circuit.  $\square$